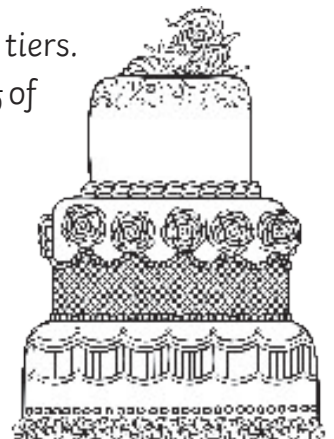



# Multi-Step Word Problems

## Fractions of Amounts

- Sarah entered a 100-word story competition. She wrote her story over two evenings. On the first evening, she wrote  $\frac{6}{10}$  and on the second evening she wrote the rest.
  - How many words did she write on the first evening?
  - How many words did she write on the second evening and what fraction was this?
- Two families, the Smiths and the Taylors, go to a restaurant for a meal. At the end of the night, when they pay their \$100 bill, they use a 50% off voucher, which halves their bill. They then split the remaining amount equally between the two families.
  - How much does the bill come to after the discount voucher?
  - How much of the remaining bill do each family pay?
- There were 120 school children going on a school excursion. There were 2 coaches, each carrying  $\frac{1}{2}$  of the children. On coach B,  $\frac{1}{6}$  of the children had medication with them.
  - How many children were on each coach?
  - How many children had medication on coach B?
- A retired couple won \$400 on the lottery. They decided to give  $\frac{3}{4}$  to their family and to spend  $\frac{1}{4}$  on a weekend away for themselves.
  - How much money did the couple give to their family?
  - How much money did they spend on their weekend away?
- Jane watched a film that was 1 hour long.  $\frac{5}{6}$  of the way through the film, the doorbell rang. She paused the film to answer the door and it was the postman with a parcel.
  - How many minutes of the film had she watched before the postman arrived?
  - How many minutes of the film did she have left to watch?
- A cake maker is icing a wedding cake that needs three different sized tiers. The icing weighs 2000g. He uses  $\frac{3}{5}$  of the icing for the bottom tier,  $\frac{3}{10}$  of the icing for the middle tier and  $\frac{1}{10}$  of the icing for the top tier.
  - What is the weight of icing in the bottom tier?
  - What is the weight of icing in the middle tier?
  - What is the weight of icing in the top tier?



7. A dressmaker has 10m of fabric to make an outfit. He makes a bag with  $\frac{1}{10}$  of the fabric, a skirt with  $\frac{1}{2}$  of the fabric and a top with the rest.
- How much fabric is used for the bag?
  - How much fabric is used for the skirt?
  - How much fabric is used for the top and what is this as a fraction of the total fabric?
8. A chef ordered twenty-four eggs for her restaurant.  $\frac{1}{6}$  of the eggs were used for a chocolate brownie special and  $\frac{1}{4}$  of the eggs were used for cooked breakfasts. From the remainder,  $\frac{1}{2}$  of the eggs were used for the meringue in a pavlova.
- How many eggs were used for the chocolate brownie?
  - How many eggs were used for the breakfasts?
  - How many eggs were used for the pavlova?
  - How many eggs were left?
9. At the county running championships, a school won 12 medals.  $\frac{1}{2}$  of the medals were gold,  $\frac{1}{3}$  of the medals were silver and  $\frac{1}{6}$  of the medals were bronze.
- How many medals were gold?
  - How many medals were silver?
  - How many medals were bronze?
10. At the local triathlon, which includes cycling, running and swimming, competitors travel a total distance of 15km.  $\frac{2}{3}$  of the distance is cycling.
- How far do the competitors cycle?
  - What distance is left for running and swimming?



# Multi- Step Word Problems

## Fractions of Amounts **Answers**

- Sarah entered a 100-word story competition. She wrote her story over two evenings. On the first evening, she wrote  $\frac{6}{10}$  and on the second evening she wrote the rest.
  - How many words did she write on the first evening? **60 words**
  - How many words did she write on the second evening and what fraction was this? **40 words =  $\frac{4}{10}$  or  $\frac{2}{5}$**
- Two families, the Smiths and the Taylors, go to a restaurant for a meal. At the end of the night, when they pay their \$100 bill, they use a 50% off voucher, which halves their bill. They then split the remaining amount equally between the two families.
  - How much does the bill come to after the discount voucher? **\$50**
  - How much of the remaining bill do each family pay? **\$25 each**
- There were 120 school children going on a school excursion. There were 2 coaches, each carrying  $\frac{1}{2}$  of the children. On coach B,  $\frac{1}{6}$  of the children had medication with them.
  - How many children were on each coach? **60 children on each coach**
  - How many children had medication on coach B? **10 children**
- A retired couple won \$400 on the lottery. They decided to give  $\frac{3}{4}$  to their family and to spend  $\frac{1}{4}$  on a weekend away for themselves.
  - How much money did the couple give to their family? **\$300**
  - How much money did they spend on their weekend away? **\$100**
- Jane watched a film that was 1 hour long.  $\frac{5}{6}$  of the way through the film, the doorbell rang. She paused the film to answer the door and it was the postman with a parcel.
  - How many minutes of the film had she watched before the postman arrived? **50 minutes**
  - How many minutes of the film did she have left to watch? **10 minutes**
- A cake maker is icing a wedding cake that needs three different sized tiers. The icing weighs 2000g. He uses  $\frac{3}{5}$  of the icing for the bottom tier,  $\frac{3}{10}$  of the icing for the middle tier and  $\frac{1}{10}$  of the icing for the top tier.
  - What is the weight of icing in the bottom tier? **1200g**
  - What is the weight of icing in the middle tier? **600g**
  - What is the weight of icing in the top tier? **200g**

7. A dressmaker has 10m of fabric to make an outfit. He makes a bag with  $\frac{1}{10}$  of the fabric, a skirt with  $\frac{1}{2}$  of the fabric and a top with the rest.
- How much fabric is used for the bag? **1m**
  - How much fabric is used for the skirt? **5m**
  - How much fabric is used for the top and what is this as a fraction of the total fabric?  
**4m =  $\frac{4}{10}$  or  $\frac{2}{5}$**
8. A chef ordered twenty-four eggs for her restaurant.  $\frac{1}{6}$  of the eggs were used for a chocolate brownie special and  $\frac{1}{4}$  of the eggs were used for cooked breakfasts. From the remainder,  $\frac{1}{2}$  of the eggs were used for the meringue in a pavlova.
- How many eggs were used for the chocolate brownie? **4**
  - How many eggs were used for the breakfasts? **6**
  - How many eggs were used for the pavlova? **7**
  - How many eggs were left? **7**
9. At the county running championships, a school won 12 medals.  $\frac{1}{2}$  of the medals were gold,  $\frac{1}{3}$  of the medals were silver and  $\frac{1}{6}$  of the medals were bronze.
- How many medals were gold? **6**
  - How many medals were silver? **4**
  - How many medals were bronze? **2**
10. At the local triathlon, which includes cycling, running and swimming, competitors travel a total distance of 15km.  $\frac{2}{3}$  of the distance is cycling.
- How far do the competitors cycle? **10km**
  - What distance is left for running and swimming? **5km**

# Multi-Step Word Problems

## Fractions of Amounts

1. Sarah entered a 500-word story competition. She wrote her story over two evenings. On the first evening, she wrote  $\frac{6}{10}$  and on the second evening she wrote the rest.
  - a. How many words did she write on the first evening?
  - b. How many words did she write on the second evening and what fraction was this?
2. Two families, the Smiths and the Taylors, go to a restaurant for a meal. At the end of the night, when they pay their \$150 bill, they decide to split the bill equally between the two families. Mr Smith pays for his family's half of the bill. The Taylor family, however, decide to split their half of the bill between each of their family members, each member paying  $\frac{1}{3}$  of their family's bill.
  - a. How much do the Smiths pay?
  - b. How much do each member of the Taylor family pay?
3. There were 180 school children going on a school excursion. There were 3 coaches, each carrying  $\frac{1}{3}$  of the children. On coach B,  $\frac{1}{6}$  of the children had medication with them.
  - a. How many children were on each coach?
  - b. How many children had medication on coach B?
4. A retired couple won \$800 on the lottery. They decided to give  $\frac{5}{8}$  to their family and to spend  $\frac{3}{8}$  on a weekend away for themselves.
  - a. How much money did the couple give to their family?
  - b. How much money did they spend on their weekend away?
5. Jane watched a film that was 120 minutes long.  $\frac{5}{6}$  of the way through the film, the doorbell rang. She paused the film to answer the door and it was the postman with a parcel.
  - a. How many minutes of the film had she watched before the postman arrived?
  - b. How many minutes of the film did she have left to watch and what fraction of the film was this?





6. A cake maker is baking a wedding cake that needs three different sized tiers. The mixture weighs 4000g. He uses  $\frac{1}{2}$  of the mixture for the bottom tier,  $\frac{3}{8}$  of the mixture for the middle tier and  $\frac{1}{8}$  of the mixture for the top tier.
- What is the weight of the mixture in the bottom tier?
  - What is the weight of the mixture in the middle tier?
  - What is the weight of the mixture in the top tier?
7. A dressmaker has 12m of fabric to make an outfit. He makes a bag with  $\frac{1}{4}$  of the fabric, a skirt with  $\frac{1}{2}$  of the fabric and a top with the rest.
- How much fabric is used for the bag?
  - How much fabric is used for the skirt?
  - How much fabric is used for the top and what is this as a fraction of the total fabric?
8. A chef ordered thirty-six eggs for her restaurant.  $\frac{1}{12}$  of the eggs were used for a chocolate brownie special and  $\frac{1}{4}$  of the eggs were used for cooked breakfasts. From the remainder,  $\frac{1}{2}$  of the eggs were used for the meringue in a pavlova.
- How many eggs were used for the chocolate brownie?
  - How many eggs were used for the breakfasts?
  - How many eggs were used for the pavlova?
  - How many eggs were left?
9. At the Olympics, a country won 60 medals.  $\frac{1}{2}$  of the medals were gold,  $\frac{1}{3}$  of the medals were silver and  $\frac{1}{6}$  of the medals were bronze.
- How many medals were gold?
  - How many medals were silver?
  - How many medals were bronze?
10. At the local triathlon, competitors travel a total distance of 20km. They cycle  $\frac{4}{5}$  of the distance, run  $\frac{3}{4}$  of the distance and swim  $\frac{1}{4}$  of the distance.
- How far do the competitors cycle?
  - How far do the competitors run?
  - How far do the competitors swim?



# Multi- Step Word Problems

## Fractions of Amounts **Answers**

1. Sarah entered a 500-word story competition. She wrote her story over two evenings. On the first evening, she wrote  $\frac{16}{5}$  and on the second evening she wrote the rest.
  - a. How many words did she write on the first evening? **300 words**
  - b. How many words did she write on the second evening and what fraction was this?  
**200 words =  $\frac{4}{10}$  or  $\frac{2}{5}$**
2. Two families, the Smiths and the Taylors, go to a restaurant for a meal. At the end of the night, when they pay their \$150 bill, they decide to split the bill equally between the two families. Mr Smith pays for his family's half of the bill. The Taylor family, however, decide to split their half of the bill between each of their family members, each member paying  $\frac{1}{3}$  of their family's bill.
  - a. How much do the Smiths pay? **\$75**
  - b. How much do each member of the Taylor family pay? **\$25**
3. There were 180 school children going on a school excursion. There were 3 coaches, each carrying  $\frac{1}{3}$  of the children. On coach B,  $\frac{1}{6}$  of the children had medication with them.
  - a. How many children were on each coach? **60 children on each coach**
  - b. How many children had medication on coach B? **10 children**
4. A retired couple won \$800 on the lottery. They decided to give  $\frac{5}{8}$  to their family and to spend  $\frac{3}{8}$  on a weekend away for themselves.
  - a. How much money did the couple give to their family? **\$500**
  - b. How much money did they spend on their weekend away? **\$300**
5. Jane watched a film that was 120 minutes long.  $\frac{5}{6}$  of the way through the film, the doorbell rang. She paused the film to answer the door and it was the postman with a parcel.
  - a. How many minutes of the film had she watched before the postman arrived?  
**100 minutes or 1 hour and 40 minutes**
  - b. How many minutes of the film did she have left to watch and what fraction of the film was this? **20 minutes =  $\frac{1}{6}$  or  $\frac{20}{120}$  or  $\frac{2}{12}$**


6. A cake maker is baking a wedding cake that needs three different sized tiers. The mixture weighs 4000g. He uses  $\frac{1}{2}$  of the mixture for the bottom tier,  $\frac{3}{8}$  of the mixture for the middle tier and  $\frac{1}{8}$  of the mixture for the top tier.
- What is the weight of the mixture in the bottom tier? **2000g or 2kg**
  - What is the weight of the mixture in the middle tier? **1500g or 1.5kg**
  - What is the weight of the mixture in the top tier? **500g or 0.5kg**
7. A dressmaker has 12m of fabric to make an outfit. He makes a bag with  $\frac{1}{4}$  of the fabric, a skirt with  $\frac{1}{2}$  of the fabric and a top with the rest.
- How much fabric is used for the bag? **3m**
  - How much fabric is used for the skirt? **6m**
  - How much fabric is used for the top and what is this as a fraction of the total fabric? **3m =  $\frac{1}{4}$**
8. A chef ordered thirty-six eggs for her restaurant.  $\frac{1}{12}$  of the eggs were used for a chocolate brownie special and  $\frac{1}{4}$  of the eggs were used for cooked breakfasts. From the remainder,  $\frac{1}{2}$  of the eggs were used for the meringue in a pavlova.
- How many eggs were used for the chocolate brownie? **3**
  - How many eggs were used for the breakfasts? **9**
  - How many eggs were used for the pavlova? **12**
  - How many eggs were left? **12**
9. At the Olympics, a country won 60 medals.  $\frac{1}{2}$  of the medals were gold,  $\frac{1}{3}$  of the medals were silver and  $\frac{1}{6}$  of the medals were bronze.
- How many medals were gold? **30**
  - How many medals were silver? **20**
  - How many medals were bronze? **10**
10. At the local triathlon, competitors travel a total distance of 20km. They cycle  $\frac{4}{5}$  of the distance, run  $\frac{3}{4}$  of the distance and swim  $\frac{1}{4}$  of the distance.
- How far do the competitors cycle? **16km**
  - How far do the competitors run? **3km**
  - How far do the competitors swim? **1km**



# Multi-Step Word Problems

## Fractions of Amounts

1. Sarah entered a 500-word story competition. She wrote her story over three evenings. On the first evening, she wrote  $\frac{2}{5}$ , on the second evening she wrote  $\frac{1}{10}$ , and on the third evening she wrote the rest.
  - a. How many words did she write on the first evening?
  - b. How many words did she write on the second evening?
  - c. How many words did she write on the third evening and what fraction was this?
2. Two families, the Smiths and the Taylors, go to a restaurant for a meal. At the end of the night, when they pay their \$177 bill, they decide to split the bill equally between the two families. Mr Smith pays for his family's half of the bill. The Taylor family, however, decide to split their half of the bill between each of their family members, each member paying  $\frac{1}{3}$  of their family's bill.
  - a. How much do the Smiths pay?
  - b. How much do each member of the Taylor family pay?
3. There were 126 school children going on a school excursion. There were 3 coaches, each carrying  $\frac{1}{3}$  of the children. On coach B,  $\frac{1}{6}$  of the children had medication with them.
  - a. How many children were on each coach?
  - b. How many children had medication on coach B?
4. A retired couple won \$628.75 on the lottery. They decided to give  $\frac{3}{5}$  to their family and to spend  $\frac{2}{5}$  on a weekend away for themselves.
  - a. How much money did the couple give to their family?
  - b. How much money did they spend on their weekend away?
5. Jane watched a film that was 156 minutes long.  $\frac{5}{6}$  of the way through the film, the doorbell rang. She paused the film to answer the door and it was the postman with a parcel.
  - a. How many minutes of the film had she watched before the postman arrived?
  - b. How many minutes of the film did she have left to watch and what fraction of the film was this?



6. A cake maker is baking a wedding cake that needs three different sized tiers. The mixture weighs 4005g. He uses  $\frac{5}{9}$  of the mixture for the bottom tier,  $\frac{1}{3}$  of the mixture for the middle tier and  $\frac{1}{9}$  of the mixture for the top tier.
- What is the weight of the mixture in the bottom tier in g and kg?
  - What is the weight of the mixture in the middle tier in g and kg?
  - What is the weight of the mixture in the top tier in g and kg?
7. A dressmaker has 8.4m of fabric to make an outfit. He makes a bag with  $\frac{1}{7}$  of the fabric, a skirt with  $\frac{2}{7}$  of the fabric and a top with the rest.
- How much fabric is used for the bag?
  - How much fabric is used for the skirt?
  - How much fabric is used for the top and what is this as a fraction of the total fabric?
8. A chef ordered five dozen eggs for her restaurant.  $\frac{1}{12}$  of the eggs were used for a chocolate brownie special. A  $\frac{1}{4}$  of the eggs for cooked breakfasts. From the remainder,  $\frac{1}{5}$  of the eggs were used for the meringue in a pavlova.
- How many eggs were used for the chocolate brownie?
  - How many eggs were used for the breakfasts?
  - How many eggs were used for the pavlova?
  - How many eggs were left?
9. At the Olympics, a country won 84 medals.  $\frac{1}{2}$  of the medals were gold,  $\frac{1}{3}$  of the medals were silver and  $\frac{1}{6}$  of the medals were bronze.
- How many medals were gold?
  - How many medals were silver?
  - How many medals were bronze?
10. At the local triathlon, competitors travel a total distance of 25km. They cycle  $\frac{4}{5}$  of the distance. From the remainder of the distance, they run  $\frac{9}{10}$  and swim  $\frac{1}{10}$ .
- How far do the competitors cycle?
  - How far do the competitors run?
  - How far do the competitors swim?



# Multi- Step Word Problems

## Fractions of Amounts **Answers**

1. Sarah entered a 500-word story competition. She wrote her story over three evenings. On the first evening, she wrote  $\frac{2}{5}$ , on the second evening she wrote  $\frac{1}{5}$ , and on the third evening she wrote the rest.
  - a. How many words did she write on the first evening? **200 words**
  - b. How many words did she write on the second evening? **50 words**
  - c. How many words did she write on the third evening and what fraction was this?  
**250 words =  $\frac{5}{10}$  or  $\frac{1}{2}$**
2. Two families, the Smiths and the Taylors, go to a restaurant for a meal. At the end of the night, when they pay their \$177 bill, they decide to split the bill equally between the two families. Mr Smith pays for his family's half of the bill. The Taylor family, however, decide to split their half of the bill between each of their family members, each member paying  $\frac{1}{3}$  of their family's bill.
  - a. How much do the Smiths pay? **\$88.50**
  - b. How much do each member of the Taylor family pay? **\$29.50**
3. There were 126 school children going on a school excursion. There were 3 coaches, each carrying  $\frac{1}{3}$  of the children. On coach B,  $\frac{1}{6}$  of the children had medication with them.
  - a. How many children were on each coach? **42 children**
  - b. How many children had medication on coach B? **7 children**
4. A retired couple won \$628.75 on the lottery. They decided to give  $\frac{3}{5}$  to their family and to spend  $\frac{2}{5}$  on a weekend away for themselves.
  - a. How much money did the couple give to their family? **\$377.25**
  - b. How much money did they spend on their weekend away? **\$251.50**
5. Jane watched a film that was 156 minutes long.  $\frac{5}{6}$  of the way through the film, the doorbell rang. She paused the film to answer the door and it was the postman with a parcel.
  - a. How many minutes of the film had she watched before the postman arrived?  
**130 minutes or 2 hours and 10 minutes**
  - b. How many minutes of the film did she have left to watch and what fraction of the film was this? **26 minutes =  $\frac{1}{6}$**

6. A cake maker is baking a wedding cake that needs three different sized tiers. The mixture weighs 4005g. He uses  $\frac{5}{9}$  of the mixture for the bottom tier,  $\frac{1}{3}$  of the mixture for the middle tier and  $\frac{1}{9}$  of the mixture for the top tier.
- What is the weight of the mixture in the bottom tier in g and kg? **2225g or 2.225kg**
  - What is the weight of the mixture in the middle tier in g and kg? **1335g or 1.335kg**
  - What is the weight of the mixture in the top tier in g and kg? **445g or 0.445kg**
7. A dressmaker has 8.4m of fabric to make an outfit. He makes a bag with  $\frac{1}{7}$  of the fabric, a skirt with  $\frac{2}{7}$  of the fabric and a top with the rest.
- How much fabric is used for the bag? **1.2m**
  - How much fabric is used for the skirt? **2.4m**
  - How much fabric is used for the top and what is this as a fraction of the total fabric?  
**4.8m =  $\frac{4}{7}$**
8. A chef ordered five dozen eggs for her restaurant.  $\frac{1}{12}$  of the eggs were used for a chocolate brownie special. A  $\frac{1}{4}$  of the eggs for cooked breakfasts. From the remainder,  $\frac{1}{5}$  of the eggs were used for the meringue in a pavlova.
- How many eggs were used for the chocolate brownie? **5**
  - How many eggs were used for the breakfasts? **15**
  - How many eggs were used for the pavlova? **8**
  - How many eggs were left? **32**
9. At the Olympics, a country won 84 medals.  $\frac{1}{2}$  of the medals were gold,  $\frac{1}{3}$  of the medals were silver and  $\frac{1}{6}$  of the medals were bronze.
- How many medals were gold? **42**
  - How many medals were silver? **28**
  - How many medals were bronze? **14**
10. At the local triathlon, competitors travel a total distance of 25km. They cycle  $\frac{4}{5}$  of the distance. From the remainder of the distance, they run  $\frac{9}{10}$  and swim  $\frac{1}{10}$ .
- How far do the competitors cycle? **20km**
  - How far do the competitors run? **4.5km**
  - How far do the competitors swim? **0.5km**